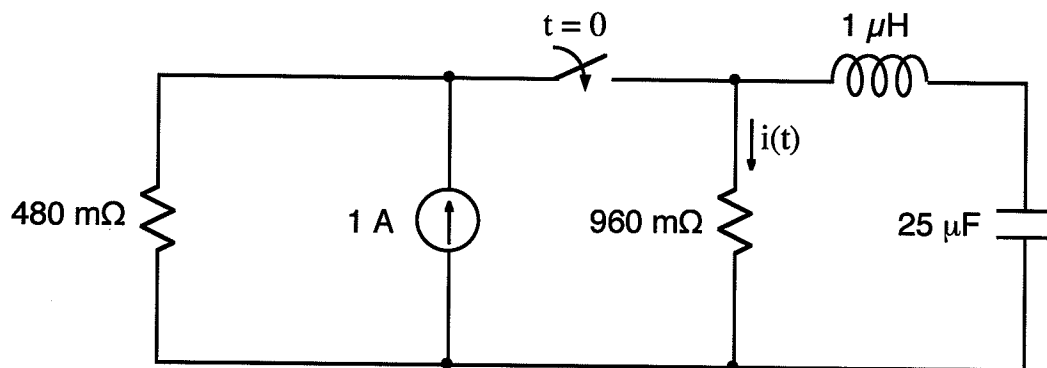


Ex:



After being open for a long time, the switch closes at  $t = 0$ .

Find  $i(t)$  for  $t > 0$ .

sol'n: Find characteristic roots using circuit for  $t > 0$ .  
Set source to zero find  $R_{Thev}$  for roots:

$$s_{1,2} = -\alpha \pm \sqrt{\alpha^2 - \omega_0^2}, \quad \alpha = \frac{R}{2L}, \quad \omega_0^2 = \frac{1}{LC}$$

$$R_{Thev} = 960 \text{ m}\Omega \parallel 480 \text{ m}\Omega = 480 \text{ m}\Omega \cdot 2 \parallel 1 = 320 \text{ m}\Omega$$

$$\alpha = \frac{320 \text{ m}\Omega}{2 \cdot 1 \mu\text{H}} = 160 \text{ k r/s} \quad \omega_0^2 = \frac{1}{1 \mu\text{H} \cdot 25 \mu\text{F}}$$

$$\alpha^2 - \omega_0^2 < 0 \text{ so underdamped} \quad \omega_0^2 = \left(\frac{1}{5} \text{ Mr/s}\right)^2$$

$$\omega_d = \sqrt{\omega_0^2 - \alpha^2} = \sqrt{(200 \text{ k})^2 - (160 \text{ k})^2} \text{ r/s}, \quad \omega_0^2 = (120 \text{ k r/s})^2$$

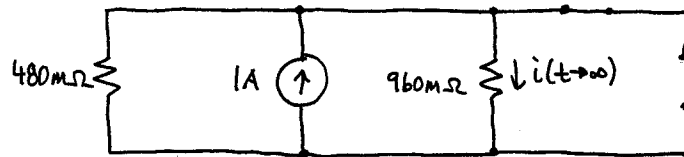
$$\omega_d = 120 \text{ k r/s}$$

$$s_{1,2} = -160 \text{ k} \pm 120 \text{ k r/s} = -40 \text{ k r/s and } -280 \text{ k r/s}$$

$$\text{Use general sol'n } i(t) = A_1 e^{-\alpha t} \cos(\omega_d t) + A_2 e^{-\alpha t} \sin(\omega_d t) + A_3$$

$A_3 = \text{final value}$

For  $t \rightarrow \infty$ ,  $L = \text{wire}$ ,  $C = \text{open}$ , switch closed.



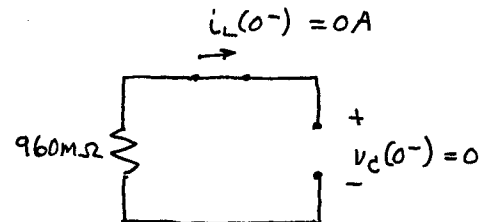
We have a current divider.

$$i(t \rightarrow \infty) = 1A \cdot \frac{480m\Omega}{480m\Omega + 960m\Omega} = \frac{1}{3} A$$

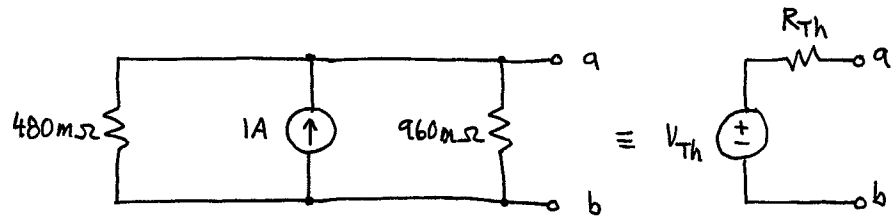
Now find  $i(0^+)$  and  $\left. \frac{di(t)}{dt} \right|_{t=0^+}$ .

Start at  $t=0^-$  and find  $i_L(0^-)$ ,  $v_C(0^-)$ .  
(Then we'll use  $i_L(0^+) = i_L(0^-)$ ,  
 $v_C(0^+) = v_C(0^-)$ .)

At  $t=0^-$ ,  $L = \text{wire}$ ,  $C = \text{open}$ , switch open.



For  $t=0^+$ , one approach is to take a Thevenin equivalent of the current source and  $R$ 's.



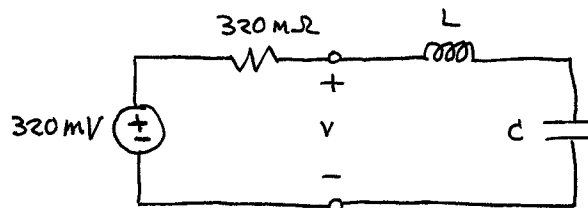
$V_{Th} = v_{a,b}$  with nothing attached to  $a, b$ .

$$V_{Th} = 1A \cdot 480m\Omega \parallel 960m\Omega = 1A \cdot 320m\Omega = 320mV$$

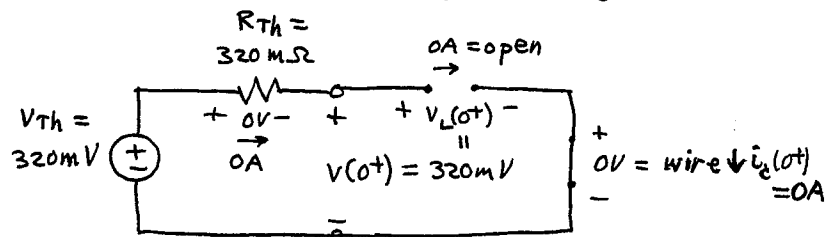
$R_{Th}$  = resistance seen looking into  $a, b$   
with  $1A$  source turned off

$$R_{Th} = 480m\Omega \parallel 960m\Omega = 320m\Omega \text{ (as noted above)}$$

We now find  $v(t)$  in our new circuit and  
use  $i(t) = v(t) / 960m\Omega$  from Ohm's law.



At  $t=0^+$  we have  $i_L(0^+) = i_L(0^-) = 0A$   
 $v_C(0^+) = v_C(0^-) = 0V$ .



$v(0^+) = 320mV$  from above circuit

We match this to symbolic  $v(0^+)$ :

$$v(t) = A_1 e^{-\alpha t} \cos(\omega_d t) + A_2 e^{-\alpha t} \sin(\omega_d t) + A_3$$

$$v(0^+) = A_1 + A_3$$

What is  $A_3$  for  $v(t)$ ? It will be the  $A_3$  we found for  $i(t)$  multiplied by  $960\text{m}\Omega$ , (by Ohm's Law).

$$A_3 = \frac{1}{3} A \cdot 960\text{m}\Omega = 320\text{mV} \quad (= 1\text{A} \cdot R_{TH})$$

Back to  $v(0^+)$ , we have

$$v(0^+) = A_1 + A_3 = 320\text{mV} \text{ from circuit}$$

"   
 320mV

$$\therefore A_1 = 0$$

Now we find  $\left. \frac{dv(t)}{dt} \right|_{t=0^+}$  by writing

$v(t)$  in terms of state vars  $i_L$  and  $v_C$ .

We must not plug in values until after we take  $d/dt$ .

$$v(t) = v_{TH} - R_{TH} i_L \quad \text{works since } i_L \text{ is state var}$$

$$\frac{dv(t)}{dt} = \frac{dv_{TH}}{dt} - R_{TH} \frac{di_L}{dt}$$

0 since  $v_{TH} = \text{const}$

Now use  $\frac{di_L}{dt} = \frac{v_L}{L}$ , (and  $\frac{dv_C}{dt} = \frac{i_C}{C}$  usually).

$$\frac{dv(t)}{dt} = -R_{TH} \frac{v_L}{L}$$

$$\left. \frac{dv(t)}{dt} \right|_{t=0^+} = -\frac{R_{TH}}{L} v_L(0^+) = \frac{-320 \text{ m}\Omega \cdot 320 \text{ mV}}{1 \mu\text{H}}$$

From symbolic  $v(t)$  we have

$$\left. \frac{dv(t)}{dt} \right|_{t=0^+} = A_1(-\alpha) + A_2 \omega_d$$

$$\text{Thus, } A_1(-\alpha) + A_2 \omega_d = \frac{-320 \text{ m}\Omega \cdot 320 \text{ mV}}{1 \mu\text{H}}$$

$$\text{But } A_1 = 0. \quad \therefore A_2 = \frac{-320 \text{ m}\Omega \cdot 320 \text{ mV}}{1 \mu\text{H} \cdot (\omega_d = 120 \text{ kr/s})}$$

$$v(t) = -\frac{320 \text{ m}\Omega \cdot 320 \text{ mV}}{1 \mu\text{H} \cdot 120 \text{ kr/s}} e^{-160kt} \sin(120kt) + 320 \text{ mV}$$

$$i(t) = \frac{v(t)}{960 \text{ m}\Omega} \quad \text{since } v \text{ is across } 960 \text{ m}\Omega$$

$$i(t) = -\frac{320 \mu\text{V} \cdot 1/3}{1 \mu\text{H} \cdot 120 \text{ kr/s}} e^{-160kt} \sin(120kt) + \frac{1}{3} \text{ A}$$

$$i(t) = -\frac{8 \text{ A}}{9} e^{-160kt} \sin(120kt) + \frac{1}{3} \text{ A}$$