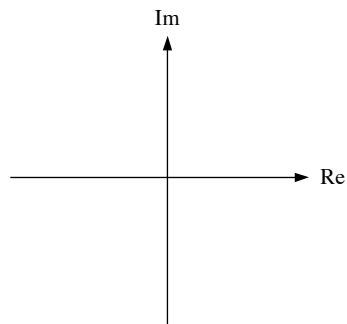




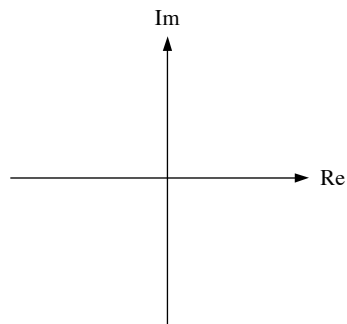
1. a) Find $\mathcal{L}\{tu(t-3)e^{-4t}\}$.
b) Find $\mathcal{L}\left\{\int_0^t e^{-6\tau} \cos(7\tau) d\tau\right\}$.
2. a) Find $f(t)$ if $F(s) = \frac{5s-62}{s^2+6s+58} - \frac{8}{s}$.
b) Find $v(t)$ if $V(s) = \frac{18s+148}{s^2+12s+11}$.
3. a) Find $\lim_{t \rightarrow 0^+} f(t)$ if $F(s) = \frac{s(9s-6)}{3(s^2+4)(s+2)}$.
b) Find $\lim_{t \rightarrow \infty} v(t)$ if $V(s) = \frac{s^2+4}{(s+3)^3}$.
4. Plot and label the values of the poles and zeros of $F(s)$ in the s plane.

$$F(s) = \frac{s^2 - 9}{s[(s+1)^2 + 4]}$$



5. Plot the poles and zeros of $V(s)$ in the s plane.

$$V(s) = \frac{s^2 + 5s + 6}{(s+1)[(s+4)^2 + 5^2]}$$



Answers:

1.a) $\mathcal{L}\{tu(t-3)e^{-4t}\} = e^{-3s} \left[e^{-12} \frac{1}{(s+4)^2} + 3e^{-12} \frac{1}{s+4} \right]$

b) $\mathcal{L}\left\{\int_0^t e^{-6\tau} \cos(7\tau) d\tau\right\} = \frac{s+6}{s[(s+6)^2 + 7^2]}$

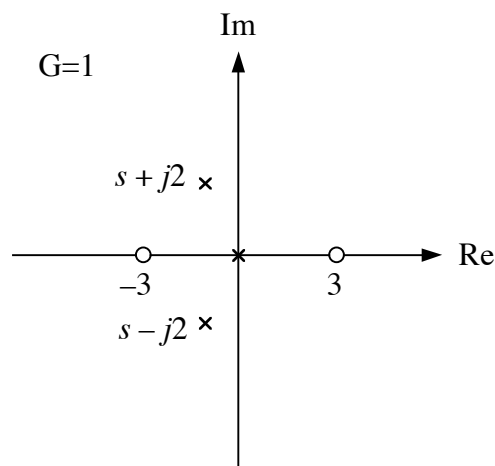
2.a) $f(t) = 5e^{-3t} \cos(7t) - 11e^{-3t} \sin(7t) - 8u(t)$

b) $\mathcal{L}^{-1}\left\{\frac{13}{s+1} + \frac{5}{s+11}\right\} = [13e^{-t} + 5e^{-11t}]u(t)$

3.a) $\lim_{t \rightarrow 0^+} f(t) = 3$

b) $\lim_{t \rightarrow \infty} v(t) = 0$

4.



5. Zeros are plotted as o's at $s = -2$ and at $s = -3$.
Poles are plotted as x's at $s = -1$, $s = -4 - j5$, and at $s = -4 + j5$.