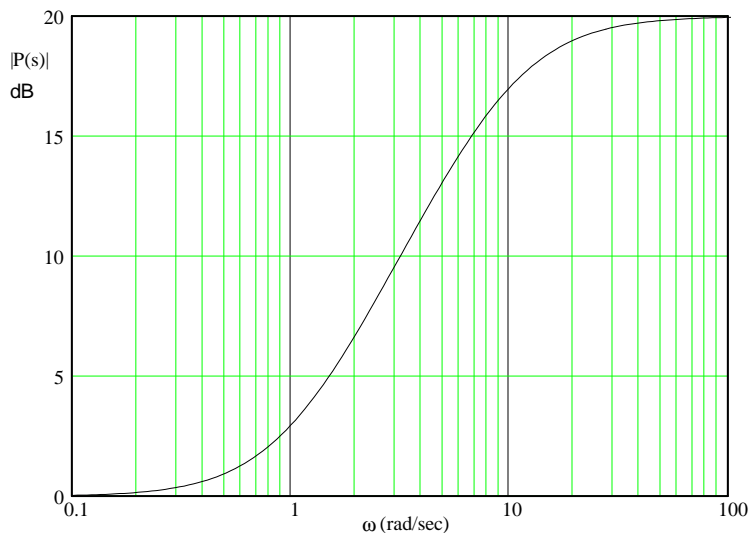


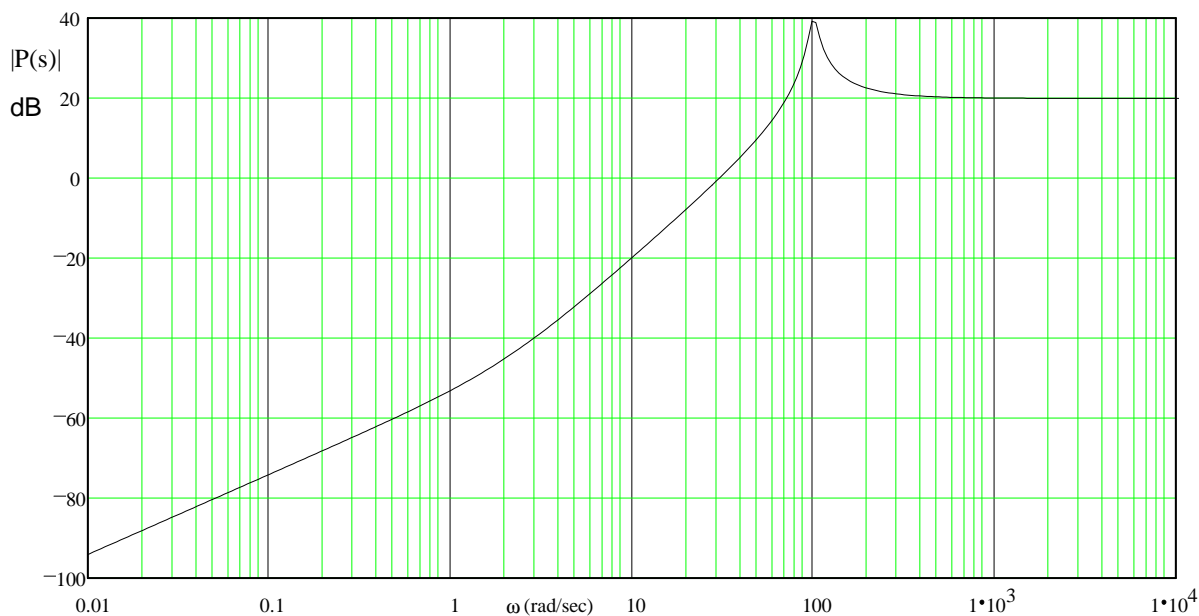
Name \_\_\_\_\_

You must show the work needed to get the answers below. Add your own paper if necessary.

1. (a & c are from Problem 5.2 in Bodson text.)  
a) The magnitude Bode plot of a system is shown below. What are the possible transfer functions of stable systems having this Bode plot?

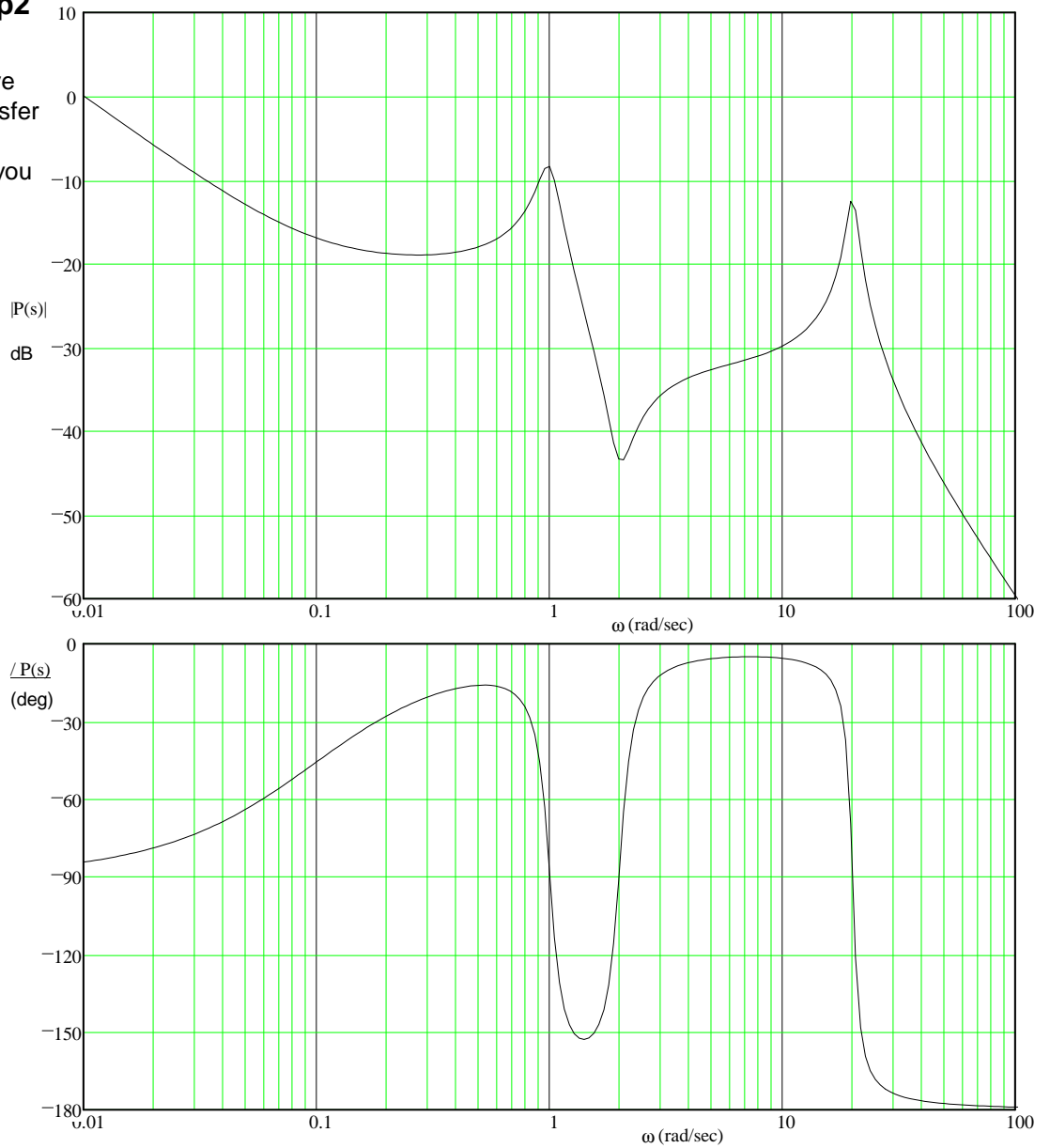


- b) A Bode plot is shown below, estimate of the transfer function of the system. Assume no negative signs in the transfer function (all poles and zeros in LHP). Show your work (how you made your estimate).



**ECE 3510 hw Bd3 p2**

c) The Bode plots of a system are shown. Give an estimate of the transfer function of the system. Show your work (how you made your estimate).



**Answers**

1.a)  $P(s) = 10 \cdot \frac{s+1}{s+10} \cdot 10 \cdot \frac{s-1}{s+10} \cdot -10 \cdot \frac{s+1}{s+10} \cdot -10 \cdot \frac{s-1}{s+10} \cdot 10 \cdot \frac{s+1}{s-10} \cdot -10 \cdot \frac{s-1}{s-10} \cdot -10 \cdot \frac{s-1}{s-10} \cdot -10 \cdot \frac{s+1}{s-10}$

The rest are NOT stable

b)  $P(s) = \frac{10 \cdot s \cdot (s+2)}{(s^2 + 10 \cdot s + 10000)}$       c)  $P(s) = \frac{10 \cdot (s+0.1) \cdot (s^2 + 0.4 \cdot s + 4)}{s \cdot (s^2 + 0.2 \cdot s + 1) \cdot (s^2 + 2 \cdot s + 400)}$